

Multiplication and Division

I have three 5c coins in my purse. How much money do I have altogether?



Multiplication and Division

I have 50c. All my coins are 10c. How many coins do I have?



Multiplication and Division

In a relay race, 4 children swim 2 lengths each. How many lengths are swam altogether?



Multiplication and Division

I look after 5 dogs. I have 30 biscuits to share equally between them. How many biscuits can I give to each dog?



Multiplication and Division

4 groups of children go on a school trip. There are 10 children in each group. How many children go on the trip?



Multiplication and Division

Adults can take 5 children each to the cinema in their cars. If 40 children are going to the cinema how many cars are needed to take them?



Multiplication and Division

I buy 6 bottles of lemonade. If there are 2 litres in each bottle, how many litres of lemonade have I bought?




Multiplication and Division

When I plant my onions I plant 6 rows and put 10 onions in each row. How many onions do I plant?



Multiplication and Division

I plant 80 carrots, 10 in each row. How many rows of carrots do I plant?



Multiplication and Division

I buy 8 packets of sweets. There are 5 sweets in each packet. How many sweets do I have?



Multiplication and Division

I bake 50 buns. If I put 5 in each bag for my school cake stall how many bags will I fill?



Multiplication and Division

I have 20 spare football cards. I share them equally between my 5 friends. How many cards will they get each?



Multiplication and Division

There are 20 sunflower seeds in a packet. If I divide them equally between 10 pots how many seeds will be in each pot?



Multiplication and Division

There are 20 sunflower seeds in a packet. If I put 2 seeds in each pot how many pots will I fill?



Multiplication and Division

The whole school goes on a trip. There are 80 people and 10 people can fit in a minibus. How many minibuses will the school need to book?



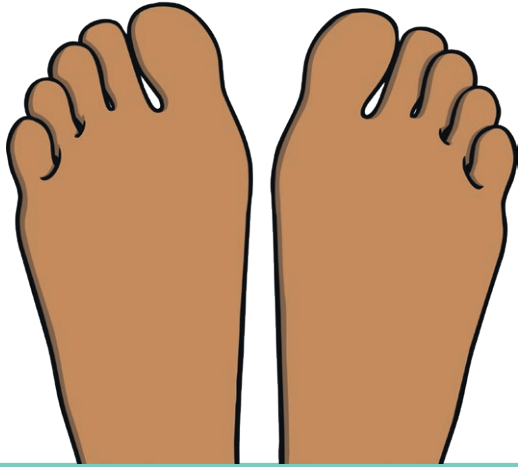
Multiplication and Division

My bookcase has 10 shelves and 10 books on each shelf. How many books are on my bookcase?



Multiplication and Division

How many toes are there on 5 children?



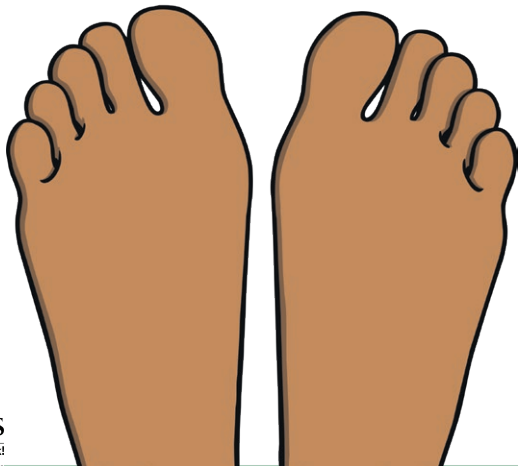
Multiplication and Division

I can see 10 eyes. How many people can I see?



Multiplication and Division

How many feet are there on 8 children?



Multiplication and Division

I can see 18 hands. How many people can I see?

